




Circle the correct answer


**HOW MANY ARE THERE?**

**COUNT ALL THE DINOSAURS**

	<p>3 <b>2</b> 4 1</p>
---	-----------------------------------

	<p>6 5 <b>4</b> 3</p>
--	-----------------------------------

	<p>4 <b>3</b> 1 2</p>
--	-----------------------------------

	<p>3 2 5 <b>1</b></p>
--	-----------------------------------